

**ARMY BURN HALL COLLEGE FOR GIRLS ABBOTTABAD
ENTRY TEST, 2022**

SUBJECT:MATHS

Max Marks:50

TIME: 1 HR

CLASS:I

Q1. Find the missing number.

/05

36			39			42	
----	--	--	----	--	--	----	--

Q2. Write the numbers in tens and ones.

/05

	Tens	ones
35		
40		
62		
54		
23		

Q3. What comes next?

/06

Before	Between	After
-----16	11-----13	30-----
-----33	20-----22	62-----

Q4. Tick the biggest number and circle the smallest number.

/04

15,11,20, 19
9,12,10,13
16,18,17,19
7,6,0,8

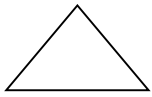
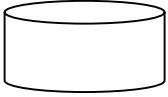

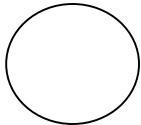
Q5. Count backwards.

/10

20					
10					

Q6. Write down names of these shapes.

/04

Q7. Write names of the following numbers.

/06

11	
20	
13	
15	
30	
8	

Q8. Add these.

/04

- $7+3=$
- $5+0=$
- $4+4=$
- $6+3=$

Q9. Write the time shown on the clock.

/02



Q10. Subtract these.

/04

- $8-3=$
- $9-0=$
- $6-2=$
- $10-7=$

-----*good luck*-----